






Name _____

SPRING MULTIPLICATION

Use the spring picture's matching number to solve these spring math questions!





1.  ×  =

9.  ×  =

2.  ×  =

10.  ×  =

3.  ×  =

11.  ×  =

4.  ×  =

12.  ×  =

5.  ×  =

13.  ×  =

6.  ×  =

14.  ×  =

7.  ×  =

15.  ×  =

8.  ×  =

16.  ×  =